

Please check the examination details below before entering your candidate information

Candidate surname

Other names

Centre Number

Candidate Number

--	--	--	--	--

--	--	--	--	--

## Pearson Edexcel International Advanced Level

Time 1 hour 45 minutes

Paper  
reference

**WCH14/01**

### Chemistry

#### International Advanced Level

#### UNIT 4: Rates, Equilibria and Further Organic Chemistry

**You must have:**

Scientific calculator, Data Booklet, ruler

Total Marks

### Instructions

- Use **black** ink or **black** ball-point pen.
- **Fill in the boxes** at the top of this page with your name, centre number and candidate number.
- Answer **all** questions.
- Answer the questions **in the spaces provided** – *there may be more space than you need.*

### Information

- The total mark for this paper is 90.
- The marks for **each** question are shown in brackets – *use this as a guide as to how much time to spend on each question.*
- In the question marked with an **asterisk** (\*), marks will be awarded for your ability to structure your answer logically, showing how the points that you make are related or follow on from each other where appropriate.
- A Periodic Table is printed on the back cover of this paper.

### Advice

- Read each question carefully before you start to answer it.
- Show all your working in calculations and include units where appropriate.
- Check your answers if you have time at the end.

Turn over ►

P69507A

©2022 Pearson Education Ltd.

L:1/1/1/1/



Pearson

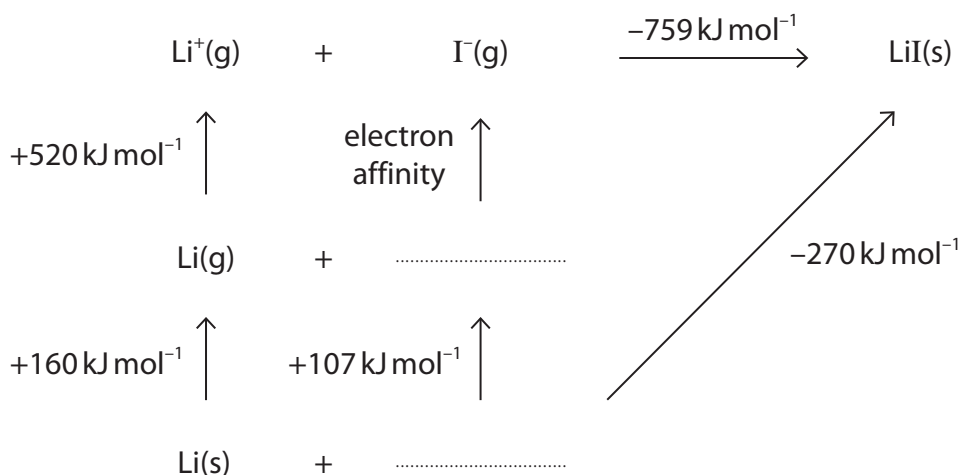
## SECTION A

Answer ALL the questions in this section.

You should aim to spend no more than 20 minutes on this section.

For each question, select one answer from A to D and put a cross in the box .  
If you change your mind, put a line through the box  and then mark your new answer with a cross .

- 1 A simplified Born-Haber cycle for the formation of lithium iodide is shown.



- (a) The enthalpy change of atomisation of iodine ( $+107 \text{ kJ mol}^{-1}$ ) is given by the equation

(1)

- A  $\frac{1}{2}\text{I}_2(\text{g}) \rightarrow \text{I}(\text{g})$
- B  $\frac{1}{2}\text{I}_2(\text{s}) \rightarrow \text{I}(\text{g})$
- C  $\text{I}_2(\text{g}) \rightarrow 2\text{I}(\text{g})$
- D  $\text{I}_2(\text{s}) \rightarrow 2\text{I}(\text{g})$

- (b) Use the information in the cycle to calculate the electron affinity of iodine.

(1)

- A  $-298 \text{ kJ mol}^{-1}$
- B  $-242 \text{ kJ mol}^{-1}$
- C  $+242 \text{ kJ mol}^{-1}$
- D  $+298 \text{ kJ mol}^{-1}$

(Total for Question 1 = 2 marks)



2 Some energy changes are given in the table.

Energy change	Value / $\text{kJ mol}^{-1}$
Lattice energy for $\text{CaCl}_2(\text{s})$	-2258
Enthalpy change of solution of $\text{CaCl}_2(\text{s})$	-120
Enthalpy change of hydration of $\text{Cl}^-(\text{g})$	-364

Use these data to calculate the enthalpy change of hydration of  $\text{Ca}^{2+}(\text{g})$ .

- A  $-1410 \text{ kJ mol}^{-1}$
- B  $-1650 \text{ kJ mol}^{-1}$
- C  $-2014 \text{ kJ mol}^{-1}$
- D  $-3106 \text{ kJ mol}^{-1}$

(Total for Question 2 = 1 mark)

Use this space for any rough working. Anything you write in this space will gain no credit.

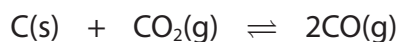


P 6 9 5 0 7 A 0 3 3 2



Turn over

3 The reaction shown is at equilibrium. The forward reaction is endothermic.



(a) Which will **increase** when the temperature is lowered?

(1)

- A the mole fraction of carbon dioxide
- B the partial pressure of carbon monoxide
- C the rate of the backward reaction
- D the value of  $K_p$  for the forward reaction

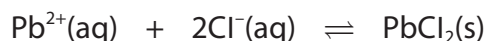
(b) At 680 °C and 1 atm, 52.6% of the molecules in the gas mixture are carbon monoxide. What is the partial pressure of carbon dioxide, in atmospheres?

(1)

- A 0.237
- B 0.263
- C 0.474
- D 0.526

(Total for Question 3 = 2 marks)

4 The equation for the precipitation of lead(II) chloride is shown.



What are the units of the equilibrium constant,  $K_c$ ?

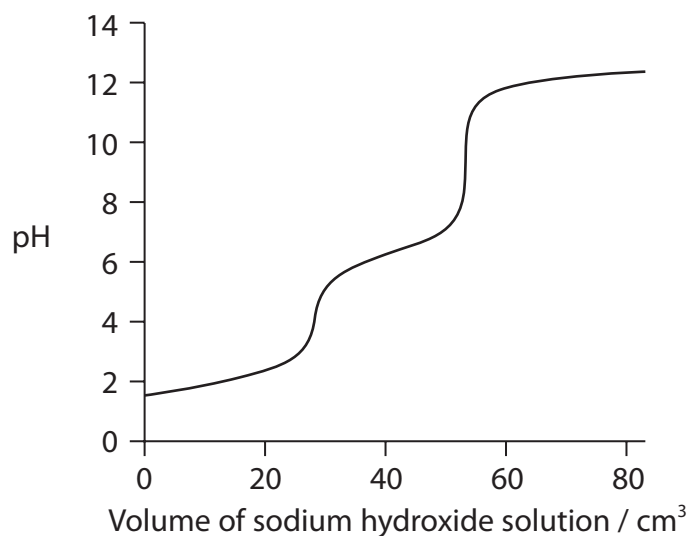
- A  $\text{dm}^9 \text{mol}^{-3}$
- B  $\text{dm}^6 \text{mol}^{-2}$
- C  $\text{mol}^2 \text{dm}^{-6}$
- D  $\text{mol}^3 \text{dm}^{-9}$

(Total for Question 4 = 1 mark)

Use this space for any rough working. Anything you write in this space will gain no credit.



- 5 An example of a diprotic acid is *cis*-butenedioic acid. Titration of this acid using sodium hydroxide solution gave the titration curve shown.



Which indicator would be most suitable for measuring the end-point of the neutralisation of the proton in *cis*-butenedioic acid which has a  $pK_a = 6.33$ ?

Use your Data Booklet.

- A bromocresol green
- B bromothymol blue
- C litmus
- D phenolphthalein

(Total for Question 5 = 1 mark)

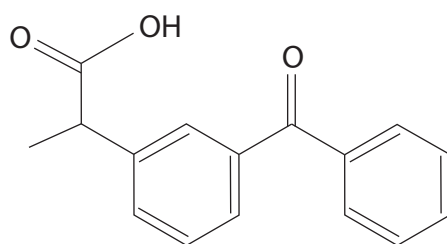
- 6 At 25 °C, the pH of pure water is 7.00 and at 100 °C, the pH of pure water is 6.14. What can be deduced from this information?

	Enthalpy change of dissociation of water	Concentration of hydrogen ions
<input type="checkbox"/> A	endothermic	higher at 100 °C than at 25 °C
<input type="checkbox"/> B	endothermic	lower at 100 °C than at 25 °C
<input type="checkbox"/> C	exothermic	higher at 100 °C than at 25 °C
<input type="checkbox"/> D	exothermic	lower at 100 °C than at 25 °C

(Total for Question 6 = 1 mark)



7 The anti-inflammatory drug ketoprofen has the structure shown.

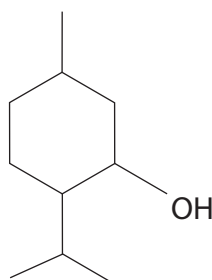


What is the molecular formula of ketoprofen?

- A  $C_{15}H_{12}O_3$
- B  $C_{16}H_{13}O_3$
- C  $C_{16}H_{14}O_3$
- D  $C_{16}H_{17}O_3$

(Total for Question 7 = 1 mark)

8 Menthol has a number of medicinal uses. It can be extracted from the peppermint plant.  
The structure of menthol is



How many chiral centres are there in one molecule of menthol?

- A 1
- B 2
- C 3
- D 4

(Total for Question 8 = 1 mark)

9 Which of these reactions does **not** result in the formation of a racemic mixture?

- A but-2-ene with HCl
- B but-1-ene with HCl
- C propanal with HCN
- D propanone with HCN

(Total for Question 9 = 1 mark)

10 When a single enantiomer of 2-iodobutane reacts with sodium hydroxide, the product is a mixture of enantiomers. This is because

- A the reaction is a nucleophilic substitution
- B the reaction proceeds via a negatively charged transition state
- C the reaction proceeds via a carbocation intermediate
- D the reaction rate depends on the concentration of 2-iodobutane

(Total for Question 10 = 1 mark)

11 How many structural isomers with the molecular formula  $C_5H_{10}O$  react with Tollens' reagent?

- A 2
- B 3
- C 4
- D 5

(Total for Question 11 = 1 mark)

Use this space for any rough working. Anything you write in this space will gain no credit.



P 6 9 5 0 7 A 0 7 3 2



Turn over



12 Propanone reacts with iodine in both acidic and alkaline conditions.

(a) The products of the reactions under the stated conditions include

(1)

	Acidic conditions	Alkaline conditions
<input type="checkbox"/> A	$\text{CH}_3\text{I}$	$\text{CH}_3\text{COO}^-$
<input type="checkbox"/> B	$\text{CH}_3\text{COCl}_3$	$\text{CH}_3\text{COO}^-$
<input type="checkbox"/> C	$\text{CH}_3\text{COCH}_2\text{I}$	$\text{CH}_3\text{I}$
<input type="checkbox"/> D	$\text{CH}_3\text{COCH}_2\text{I}$	$\text{CHI}_3$

(b) The rate equation for the reaction between propanone and iodine in acidic conditions is

$$\text{rate} = k[\text{H}^+][\text{CH}_3\text{COCH}_3]$$

The reaction was carried out at two different pH values, all other conditions remaining unchanged.

In the first reaction  $\text{pH} = 2.0$

In the second reaction the rate was found to be  $\frac{1}{3}$  of the original value.


What was the pH of the second reaction, to 1 decimal place?

(1)

- A 0.7
- B 1.5
- C 2.5
- D 2.7

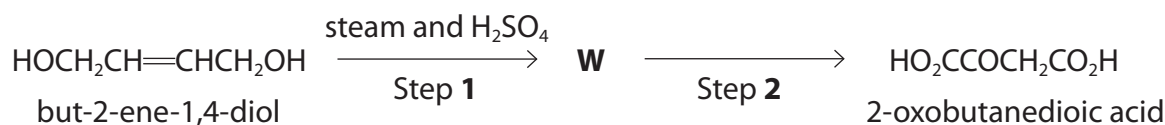
(Total for Question 12 = 2 marks)

Use this space for any rough working. Anything you write in this space will gain no credit.





- 13 But-2-ene-1,4-diol may be converted into 2-oxobutanedioic acid in a two-step synthesis through an intermediate compound **W**.



Identify the intermediate compound **W** and the reagent for Step 2.

	Compound <b>W</b>	Reagent for Step 2
<input type="checkbox"/> <b>A</b>	HOCH <sub>2</sub> CH(OH)CH <sub>2</sub> CH <sub>2</sub> OH	LiAlH <sub>4</sub> in dry ether
<input type="checkbox"/> <b>B</b>	HOOCCH <sub>2</sub> CH=CHCOOH	LiAlH <sub>4</sub> in dry ether
<input type="checkbox"/> <b>C</b>	OHCCH(OH)CH <sub>2</sub> CHO	hot acidified K <sub>2</sub> Cr <sub>2</sub> O <sub>7</sub>
<input type="checkbox"/> <b>D</b>	HOCH <sub>2</sub> CH(OH)CH <sub>2</sub> CH <sub>2</sub> OH	hot acidified K <sub>2</sub> Cr <sub>2</sub> O <sub>7</sub>

(Total for Question 13 = 1 mark)

- 14 Compound **X**, C<sub>4</sub>H<sub>10</sub>O, is oxidised to form compound **Y**.

Compound **Y** reacts with ethanol in the presence of concentrated sulfuric acid to give an ester, **Z**.

Which of these could be the formula of **Z**?

- A** CH<sub>3</sub>COOC(CH<sub>3</sub>)<sub>3</sub>
- B** CH<sub>3</sub>CH<sub>2</sub>COO(CH<sub>2</sub>)<sub>3</sub>CH<sub>3</sub>
- C** (CH<sub>3</sub>)<sub>2</sub>CHCOOCH<sub>2</sub>CH<sub>3</sub>
- D** CH<sub>3</sub>CH<sub>2</sub>COOCH<sub>2</sub>CH(CH<sub>3</sub>)<sub>2</sub>

(Total for Question 14 = 1 mark)

Use this space for any rough working. Anything you write in this space will gain no credit.



15 Which of these compounds is a product of the hydrolysis of  $\text{CH}_3\text{COOC}_3\text{H}_7$  by refluxing with aqueous sodium hydroxide?

- A  $\text{CH}_3\text{OH}$
- B  $\text{C}_3\text{H}_7\text{OH}$
- C  $\text{C}_3\text{H}_7\text{COOH}$
- D  $\text{C}_3\text{H}_7\text{COO}^-\text{Na}^+$

(Total for Question 15 = 1 mark)

16 In gas chromatography, a gas containing a mixture is passed over a liquid stationary phase. The main reason a mixture is separated into its components is because they have different

- A boiling temperatures
- B forces of attraction to the liquid
- C relative molecular masses
- D volatilities

(Total for Question 16 = 1 mark)

17 In HPLC, the mobile and stationary phases are

	Mobile phase	Stationary phase
	gas	liquid
	gas	solid
	liquid	gas
	liquid	solid

(Total for Question 17 = 1 mark)

**TOTAL FOR SECTION A = 20 MARKS**



DO NOT WRITE IN THIS AREA

DO NOT WRITE IN THIS AREA

DO NOT WRITE IN THIS AREA

**BLANK PAGE**



P 6 9 5 0 7 A 0 1 1 3 2

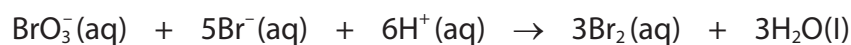


11  
*Turn over*

## SECTION B

Answer ALL the questions. Write your answers in the spaces provided.

18 Bromate(V) ions,  $\text{BrO}_3^-$ , oxidise bromide ions,  $\text{Br}^-$ , in dilute acid.



Experiments to determine initial reaction rates were carried out using different initial concentrations of the three reactants.

The results are shown in the table.

Experiment number	$[\text{BrO}_3^-(\text{aq})]$ / $\text{mol dm}^{-3}$	$[\text{Br}^-(\text{aq})]$ / $\text{mol dm}^{-3}$	$[\text{H}^+(\text{aq})]$ / $\text{mol dm}^{-3}$	Initial rate of reaction / $\text{mol dm}^{-3} \text{s}^{-1}$
1	0.10	0.25	0.30	$3.36 \times 10^{-5}$
2	0.10	0.25	0.60	$1.34 \times 10^{-4}$
3	0.15	0.50	0.30	$1.01 \times 10^{-4}$
4	0.15	0.25	0.60	$2.01 \times 10^{-4}$

(a) The reaction is first order with respect to bromate(V) ions.

(i) Deduce the rate equation for the reaction.  
Justify your answer using the data.

(4)

.....

.....

.....

.....

.....

.....

.....

.....

.....

.....

DO NOT WRITE IN THIS AREA

DO NOT WRITE IN THIS AREA

DO NOT WRITE IN THIS AREA



(ii) Use the data from Experiment 4 and your answer to (a)(i) to calculate the rate constant for the reaction. Include units in your answer.

(3)

(b) Give **one** possible reason why the rate equation shows that the reaction cannot proceed in one step.

(1)

.....

.....

.....

.....

**(Total for Question 18 = 8 marks)**

DO NOT WRITE IN THIS AREA

DO NOT WRITE IN THIS AREA

DO NOT WRITE IN THIS AREA



P 6 9 5 0 7 A 0 1 3 3 2

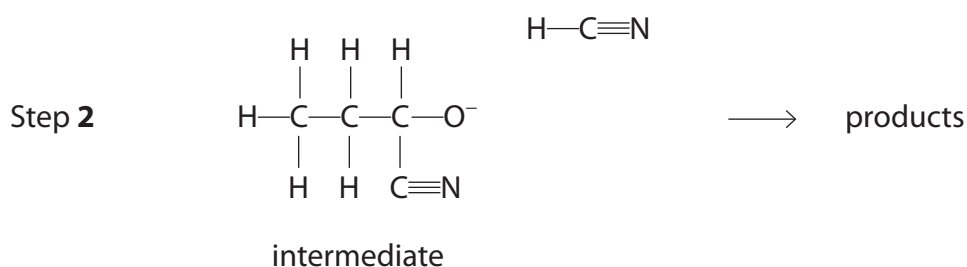
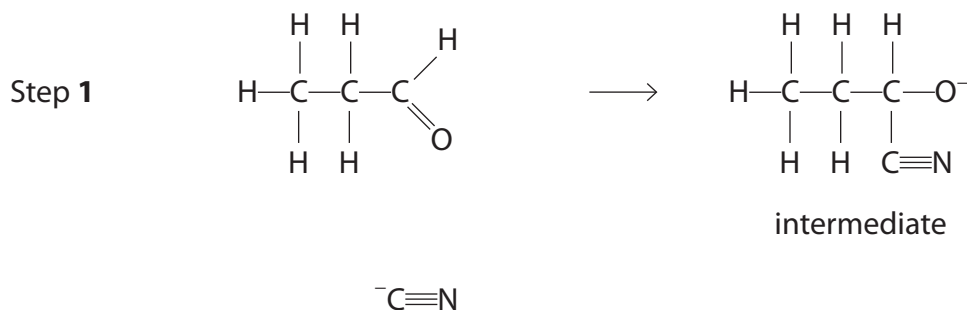


Turn over

19 Propanal reacts very slowly with HCN at 298 K. To increase the rate of reaction potassium cyanide, KCN, is added.

- (a) (i) Complete the mechanism for this reaction by adding curly arrows, and relevant lone pairs and dipoles to Step 1 and Step 2.

(4)



- (ii) Explain why the reaction between propanal and HCN in the absence of KCN is very slow, referring to the value of  $K_a$ . No calculation is required.

[For HCN,  $K_a = 4.9 \times 10^{-10} \text{ mol dm}^{-3}$ ]

(2)

.....

.....

.....

.....

.....

.....

DO NOT WRITE IN THIS AREA

DO NOT WRITE IN THIS AREA

DO NOT WRITE IN THIS AREA



(iii) KCN is a **homogeneous catalyst** in this reaction.  
Justify this description by referring to the mechanism.

(2)

.....

.....

.....

.....

.....

(b) The organic products of this reaction are enantiomers.

Draw the three-dimensional structures of these enantiomers.

(2)

(Total for Question 19 = 10 marks)



Turn over



P 6 9 5 0 7 A 0 1 5 3 2



DO NOT WRITE IN THIS AREA

DO NOT WRITE IN THIS AREA

DO NOT WRITE IN THIS AREA



DO NOT WRITE IN THIS AREA

DO NOT WRITE IN THIS AREA

DO NOT WRITE IN THIS AREA

**BLANK PAGE**



DO NOT WRITE IN THIS AREA

DO NOT WRITE IN THIS AREA

DO NOT WRITE IN THIS AREA

20 This question is about compounds with the molecular formula  $C_6H_{12}O_2$ .

(a) Hexanoic acid,  $C_5H_{11}COOH$ , is a weak acid.

(i) Write the equation for the acid dissociation constant,  $K_a$ , of hexanoic acid. (1)

(ii) Calculate the pH of a  $0.100 \text{ mol dm}^{-3}$  solution of hexanoic acid.

[ $pK_a$  of hexanoic acid = 4.88] (4)



P 6 9 5 0 7 A 0 1 7 3 2



Turn over

- (iii) The solubility of hexanoic acid in water is 1.08 g per 100 g of water.  
The isomer of hexanoic acid, butyl ethanoate,  $\text{CH}_3\text{CO}_2\text{C}_4\text{H}_9$ , has a solubility of 0.68 g per 100 g of water.

Explain the differences in these data in terms of the hydrogen bonding between hexanoic acid and water, and between butyl ethanoate and water.

(3)

.....

.....

.....

.....

.....

.....

.....

.....

.....

.....

DO NOT WRITE IN THIS AREA

DO NOT WRITE IN THIS AREA

DO NOT WRITE IN THIS AREA



DO NOT WRITE IN THIS AREA

DO NOT WRITE IN THIS AREA

DO NOT WRITE IN THIS AREA

(b) (i) Compound **A** is thought to be another isomer of hexanoic acid.

10 g of compound **A** is found to contain 6.21 g of carbon and 1.03 g of hydrogen, with the remainder being oxygen.

Use the data to calculate the empirical formula of compound **A**.

You must show **all** your working.

(3)

(ii) State how you might use your answer to (b)(i) and a mass spectrum of compound **A** to prove that compound **A** is an isomer of hexanoic acid.

(1)

.....

.....

.....

.....

.....



P 6 9 5 0 7 A 0 1 9 3 2



Turn over

\*(iii) A series of tests was performed on compound **A**.

	Test	Observation
1	addition of phosphorus(V) chloride	misty fumes
2	addition of 2,4-dinitrophenylhydrazine	orange precipitate
3	addition of Benedict's or Fehling's reagent	solution remains blue with no precipitate
4	addition of acidified potassium dichromate(VI)	solution remains orange
5	test using polarimetry	plane of plane polarised light is rotated

Deduce the structure for compound **A**.  
Justify your answer by using all the test results.

(6)

DO NOT WRITE IN THIS AREA

DO NOT WRITE IN THIS AREA

DO NOT WRITE IN THIS AREA



DO NOT WRITE IN THIS AREA

DO NOT WRITE IN THIS AREA

DO NOT WRITE IN THIS AREA

Handwriting practice area with 20 sets of horizontal lines. Each set consists of a solid top line, a dashed midline, and a solid bottom line.



P 6 9 5 0 7 A 0 2 1 3 2



21  
Turn over

- (c) Compound **B**, another isomer with the molecular formula  $C_6H_{12}O_2$ , contains a ring of six carbon atoms.

The carbon-13 NMR spectrum has only two peaks, one of which is at 69 ppm.

Draw the structure of compound **B**.

(2)

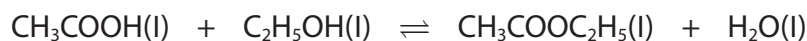
(Total for Question 20 = 20 marks)





21 Esters are used in flavourings and perfumes.  
They can be made by reactions involving alcohols.

- (a) A flask containing a mixture of 0.200 mol of ethanoic acid and 0.150 mol of ethanol was left at 25 °C, in the presence of a catalyst, until equilibrium had been established.



The ethanoic acid present in the equilibrium mixture required 34.8 cm<sup>3</sup> of a 2.50 mol dm<sup>-3</sup> solution of sodium hydroxide for complete neutralisation.

- (i) Calculate the value of the equilibrium constant,  $K_c$ , for this reaction at 25 °C. (4)

- (ii) The enthalpy change for this reaction is small.

Explain, by reference to the type and number of bonds being broken and made, how this might have been predicted. (2)

.....

.....

.....

.....

.....





DO NOT WRITE IN THIS AREA

DO NOT WRITE IN THIS AREA

DO NOT WRITE IN THIS AREA

**BLANK PAGE**



P 6 9 5 0 7 A 0 2 5 3 2

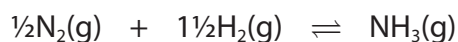


Turn over

## SECTION C

**Answer ALL the questions. Write your answers in the spaces provided.**

**22** The equation for the formation of ammonia in the Haber Process is shown



(a) At 298 K the standard entropy change of the system,  $\Delta S_{\text{system}}^{\ominus} = -98 \text{ J K}^{-1} \text{ mol}^{-1}$ .

Calculate the standard entropy of one mole of ammonia.

Use the value of  $\Delta S_{\text{system}}^{\ominus}$  and the data in the table.

Substance	Standard molar entropy, $S^{\ominus} / \text{J K}^{-1} \text{ mol}^{-1}$
N <sub>2</sub>	192
H <sub>2</sub>	131

(2)

(b) The value of the total entropy change,  $\Delta S_{\text{total}}$ , varies with temperature. Data for the value of  $\Delta S_{\text{total}}$  at different temperatures but at standard pressure of 100 kPa are given for this reaction.

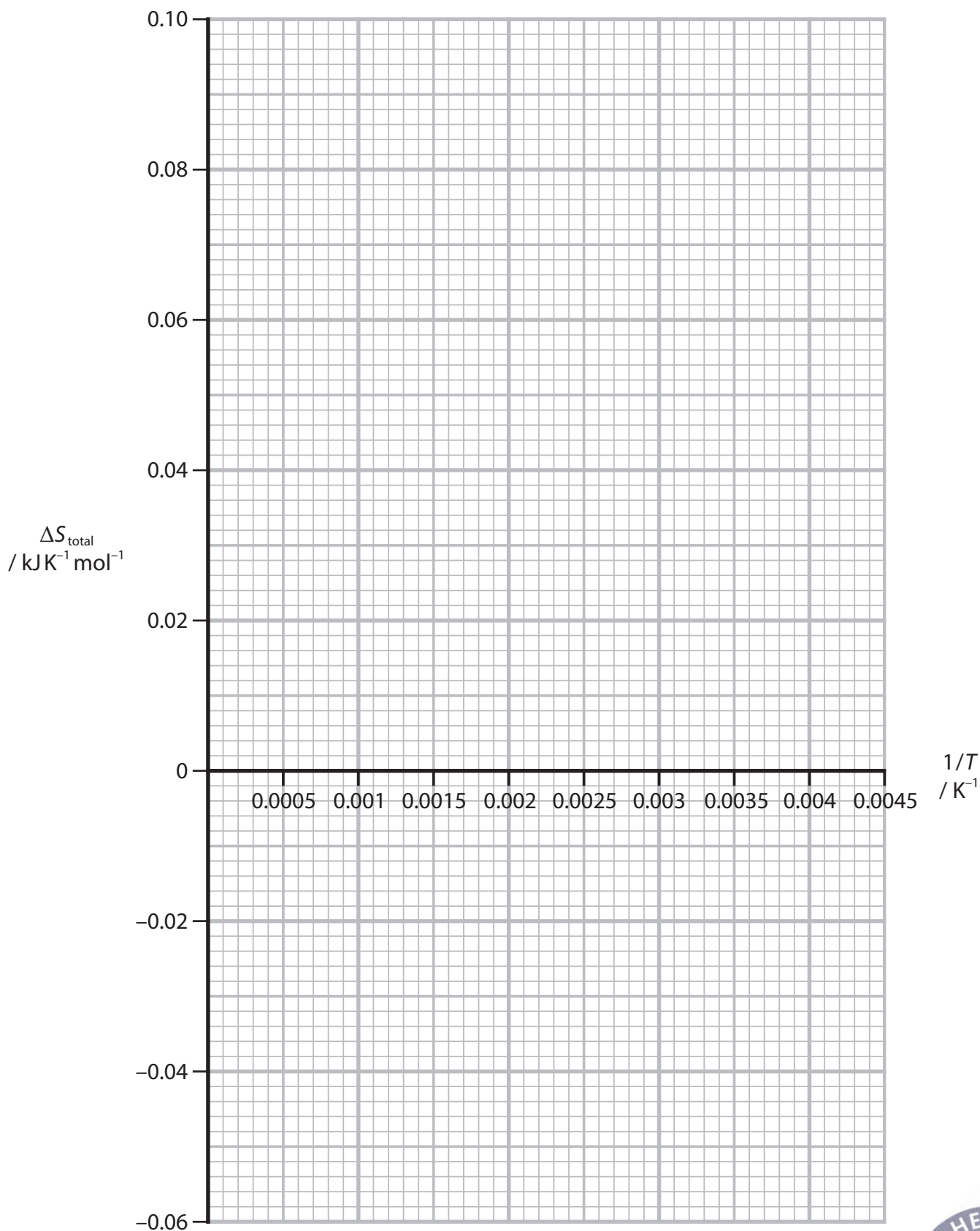
Temperature / K	$1/T / \text{K}^{-1}$	$\Delta S_{\text{total}} / \text{kJ K}^{-1} \text{ mol}^{-1}$
250	$4.00 \times 10^{-3}$	$8.27 \times 10^{-2}$
375	$2.67 \times 10^{-3}$	$2.25 \times 10^{-2}$
500	$2.00 \times 10^{-3}$	$-0.764 \times 10^{-2}$
625	$1.60 \times 10^{-3}$	$-2.57 \times 10^{-2}$
750	$1.33 \times 10^{-3}$	$-3.77 \times 10^{-2}$



Plot a graph of  $\Delta S_{\text{total}}$  against  $1/T$  on the grid.

Include a line of best fit.

(2)



DO NOT WRITE IN THIS AREA

DO NOT WRITE IN THIS AREA

DO NOT WRITE IN THIS AREA



P 6 9 5 0 7 A 0 2 7 3 2



Turn over

- (c) The relationship between  $\Delta S_{\text{total}}$  and  $1/T$  can be found by combining the two equations:

$$\Delta S_{\text{total}} = \Delta S_{\text{surroundings}} + \Delta S_{\text{system}}$$

and  $\Delta S_{\text{surroundings}} = -\Delta H/T$

to give

$$\Delta S_{\text{total}} = -\Delta H/T + \Delta S_{\text{system}}$$

- (i) Determine the gradient of the line plotted in (b), including units in your answer.

(1)

- (ii) Identify the thermodynamic quantity that can be obtained from this gradient.

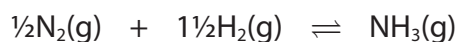
(1)

- (iii) Determine the temperature at which the reaction ceases to be thermodynamically feasible at a pressure of 100 kPa.

(1)



(d) The industrial synthesis of ammonia



is carried out at pressures of about 20 000 kPa and temperatures between 700 K and 750 K. These temperatures are higher than the answer to (c)(iii).

(i) State the relationship between the total entropy,  $\Delta S_{\text{total}}$ , and the equilibrium constant,  $K$ .

(1)

(ii) Calculate the value of the equilibrium constant  $K$  at 750 K.

$$[\Delta S_{\text{total}} \text{ at } 750 \text{ K} = -37.7 \text{ J K}^{-1} \text{ mol}^{-1}]$$

(2)

(iii) Explain why  $\Delta S_{\text{total}}$  decreases with an increase in temperature.

(3)





(iv) State how the Haber Process is made economically feasible at 750K even though the total entropy change is negative.

(1)

.....

.....

.....

(e) Ammonia from the Haber Process reacts with acids.  
With phosphoric acid,  $\text{H}_3\text{PO}_4$ , a number of products are formed in solution.  
One of these is the fertiliser diammonium hydrogenphosphate.

(i) Write an equation for the production of this fertiliser.  
State symbols are not required.

(2)

(ii) Write an **ionic** equation to show that ammonium ions are acidic in aqueous solution.  
State symbols are not required.

(1)

DO NOT WRITE IN THIS AREA

DO NOT WRITE IN THIS AREA

DO NOT WRITE IN THIS AREA





# The Periodic Table of Elements

1 2 3 4 5 6 7 0 (8) (18)

1.0	<b>H</b>	hydrogen	1
-----	----------	----------	---

### Key

relative atomic mass
<b>atomic symbol</b>
name
atomic (proton) number

(1)	(2)	(3)	(4)	(5)	(6)	(7)	(8)	(9)	(10)	(11)	(12)	(13)	(14)	(15)	(16)	(17)	(18)
6.9 <b>Li</b> lithium 3	9.0 <b>Be</b> beryllium 4	45.0 <b>Sc</b> scandium 21	47.9 <b>Ti</b> titanium 22	50.9 <b>V</b> vanadium 23	52.0 <b>Cr</b> chromium 24	54.9 <b>Mn</b> manganese 25	55.8 <b>Fe</b> iron 26	58.9 <b>Co</b> cobalt 27	58.7 <b>Ni</b> nickel 28	63.5 <b>Cu</b> copper 29	65.4 <b>Zn</b> zinc 30	10.8 <b>B</b> boron 5	12.0 <b>C</b> carbon 6	14.0 <b>N</b> nitrogen 7	16.0 <b>O</b> oxygen 8	19.0 <b>F</b> fluorine 9	4.0 <b>He</b> helium 2
23.0 <b>Na</b> sodium 11	24.3 <b>Mg</b> magnesium 12	88.9 <b>Y</b> yttrium 39	91.2 <b>Zr</b> zirconium 40	92.9 <b>Nb</b> niobium 41	95.9 <b>Mo</b> molybdenum 42	[98] <b>Tc</b> technetium 43	101.1 <b>Ru</b> ruthenium 44	102.9 <b>Rh</b> rhodium 45	106.4 <b>Pd</b> palladium 46	107.9 <b>Ag</b> silver 47	112.4 <b>Cd</b> cadmium 48	27.0 <b>Al</b> aluminium 13	28.1 <b>Si</b> silicon 14	31.0 <b>P</b> phosphorus 15	32.1 <b>S</b> sulfur 16	35.5 <b>Cl</b> chlorine 17	39.9 <b>Ar</b> argon 18
39.1 <b>K</b> potassium 19	40.1 <b>Ca</b> calcium 20	87.6 <b>Sr</b> strontium 38	178.5 <b>Hf</b> hafnium 72	180.9 <b>Ta</b> tantalum 73	183.8 <b>W</b> tungsten 74	186.2 <b>Re</b> rhenium 75	190.2 <b>Os</b> osmium 76	192.2 <b>Ir</b> iridium 77	195.1 <b>Pt</b> platinum 78	197.0 <b>Au</b> gold 79	200.6 <b>Hg</b> mercury 80	69.7 <b>Ga</b> gallium 31	72.6 <b>Ge</b> germanium 32	74.9 <b>As</b> arsenic 33	79.0 <b>Se</b> selenium 34	79.9 <b>Br</b> bromine 35	83.8 <b>Kr</b> krypton 36
132.9 <b>Cs</b> caesium 55	137.3 <b>Ba</b> barium 56	138.9 <b>La*</b> lanthanum 57	173.0 <b>Lu</b> lutetium 71	186.2 <b>Os</b> osmium 76	190.2 <b>Ru</b> ruthenium 44	192.2 <b>Ir</b> iridium 77	195.1 <b>Pt</b> platinum 78	197.0 <b>Au</b> gold 79	200.6 <b>Hg</b> mercury 80	204.4 <b>Tl</b> thallium 81	207.2 <b>Pb</b> lead 82	114.8 <b>In</b> indium 49	118.7 <b>Sn</b> tin 50	121.8 <b>Sb</b> antimony 51	127.6 <b>Te</b> tellurium 52	127.6 <b>Te</b> tellurium 52	131.3 <b>Xe</b> xenon 54
[223] <b>Fr</b> francium 87	[226] <b>Ra</b> radium 88	[227] <b>Ac*</b> actinium 89	[261] <b>Rf</b> rutherfordium 104	[262] <b>Db</b> dubnium 105	[266] <b>Sg</b> seaborgium 106	[264] <b>Bh</b> bohrium 107	[277] <b>Hs</b> hassium 108	[271] <b>Ds</b> darmstadtium 110	[272] <b>Rg</b> roentgenium 111	204.4 <b>Tl</b> thallium 81	207.2 <b>Pb</b> lead 82	114.8 <b>In</b> indium 49	118.7 <b>Sn</b> tin 50	121.8 <b>Sb</b> antimony 51	127.6 <b>Te</b> tellurium 52	127.6 <b>Te</b> tellurium 52	131.3 <b>Xe</b> xenon 54

Elements with atomic numbers 112-116 have been reported but not fully authenticated

140 <b>Ce</b> cerium 58	141 <b>Pr</b> praseodymium 59	144 <b>Nd</b> neodymium 60	150 <b>Sm</b> samarium 62	152 <b>Eu</b> europium 63	157 <b>Gd</b> gadolinium 64	163 <b>Dy</b> dysprosium 66	165 <b>Ho</b> holmium 67	167 <b>Er</b> erbium 68	169 <b>Tm</b> thulium 69	173 <b>Yb</b> ytterbium 70	175 <b>Lu</b> lutetium 71
232 <b>Th</b> thorium 90	[231] <b>Pa</b> protactinium 91	238 <b>U</b> uranium 92	[242] <b>Pu</b> plutonium 94	[243] <b>Am</b> americium 95	[247] <b>Cm</b> curium 96	[251] <b>Cf</b> californium 98	[254] <b>Es</b> einsteinium 99	[253] <b>Fm</b> fermium 100	[256] <b>Md</b> mendelevium 101	[254] <b>No</b> nobelium 102	[257] <b>Lr</b> lawrencium 103

\* Lanthanide series

\* Actinide series



DO NOT WRITE IN THIS AREA

DO NOT WRITE IN THIS AREA

DO NOT WRITE IN THIS AREA



P 6 9 5 0 7 A 0 3 2 3 2